


Math Kangaroo 2012 Sample Questions

LEVELS 1 AND 2

SAMPLE QUESTION FOR 3 POINTS


How many animals are there in the picture below?



- A) 3 B) 4 C) 5 D) 6 E) 7

SAMPLE QUESTION FOR 4 POINTS


Father hangs the laundry outside on a clothesline. He wants to use as few pins as possible. For 3 towels he needs 4 pins, as shown. How many pins does he need for 9 towels?



- A) 9 B) 10 C) 12 D) 16 E) 18

SAMPLE QUESTION FOR 5 POINTS

There are coins on the board. We want to have 2 coins in each column and 2 coins in each row. How many coins need to be removed?




- A) 0 B) 1 C) 2 D) 3 E) 4

Math Kangaroo 2012 Sample Questions

LEVELS 1 AND 2 ANSWERS

SAMPLE QUESTION FOR 3 POINTS


How many animals are there in the picture below?



- A) 3 B) 4 C) 5 D) 6 E) 7

SAMPLE QUESTION FOR 4 POINTS


Father hangs the laundry outside on a clothesline. He wants to use as few pins as possible. For 3 towels he needs 4 pins, as shown. How many pins does he need for 9 towels?



- A) 9 B) 10 C) 12 D) 16 E) 18

SAMPLE QUESTION FOR 5 POINTS

There are coins on the board. We want to have 2 coins in each column and 2 coins in each row. How many coins need to be removed?



- A) 0 B) 1 C) 2 D) 3 E) 4